



UNIVERSITY OF CAMBRIDGE INTERNATIONAL EXAMINATIONS  
International General Certificate of Secondary Education

CANDIDATE  
NAME

CENTRE  
NUMBER

--	--	--	--	--

CANDIDATE  
NUMBER

--	--	--	--



**GEOGRAPHY**

**0460/04**

Paper 4 Alternative to Coursework

**May/June 2008**

**1 hour 30 minutes**

Candidates answer on the Question Paper.

Additional Materials: Calculator  
Ruler

**READ THESE INSTRUCTIONS FIRST**

Write your Centre number, candidate number and name on all the work you hand in.  
Write in dark blue or black pen.  
You may use a soft pencil for any diagrams, graphs or rough working.  
Do not use staples, paper clips, highlighters, glue or correction fluid.  
DO **NOT** WRITE ON ANY BARCODES.

Answer **all** the questions.  
The Insert contains Fig. 1 for Question 1 and Figs 6 and 8 for Question 2.  
The Insert is **not** required by the Examiner.  
Sketch maps and diagrams should be drawn whenever they serve to illustrate an answer.

At the end of the examination, fasten all your work securely together.  
The number of marks is given in brackets [ ] at the end of each question or part question.

For Examiner's Use	
Q1	
Q2	
Total	

This document consists of **14** printed pages, **2** blank pages and **1** Insert.



1 Students at a school in the Netherlands, a northern European country, investigated the microclimate around their school. This was to find out whether buildings and different types of ground surface influenced the air temperature and the relative humidity.

The two hypotheses used by the students were

- *'the school buildings increase the outside air temperature'*
- *'vegetation on the surface of the ground affects the relative humidity'*

(a) (i) The recording of air temperature and relative humidity took place in calm, stable conditions during November. Why was this important to the investigation?

.....

.....

.....

.....[2]

(ii) Study the map, Fig. 1 (Insert), which shows eight sites, labelled A to H, around the school buildings. These sites were used by the students for measuring the air temperature and relative humidity. Explain how school buildings in November (a winter month) may influence the outside air temperature at different sites.

.....

.....

.....

.....[2]

(b) (i) The school's Stevenson screen is located at Site A. Suggest reasons why this is the best location for a Stevenson screen.

.....

.....

.....

.....[2]

- (ii) A traditional maximum-minimum (Six's) thermometer is located in the Stevenson screen. Use Fig. 2 to identify maximum, minimum and present temperature scales on the thermometer. Record these in the boxes on Fig. 2.

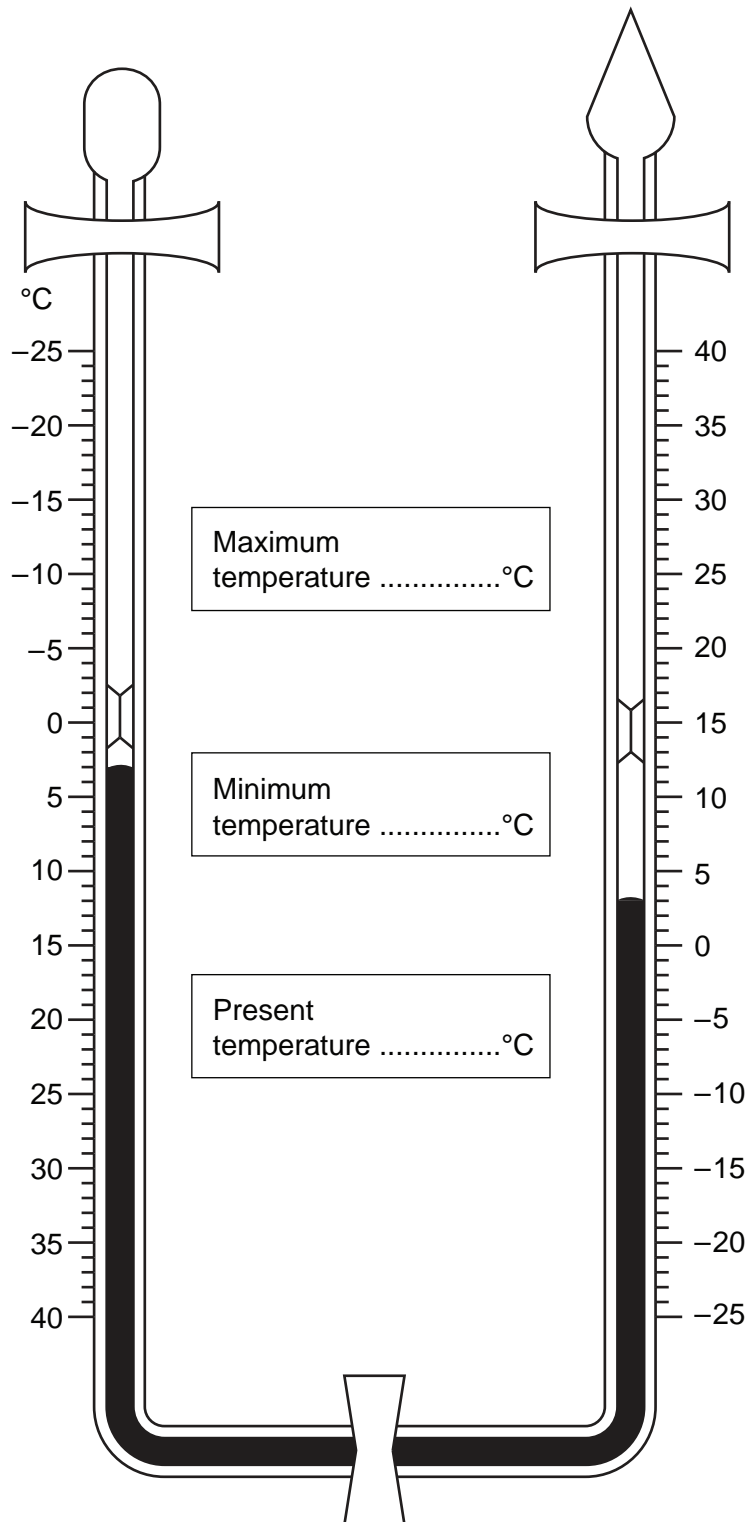


Fig. 2

- (c) The air temperature at the other seven sites was measured using a hand-held thermometer. Study the instructions from the teacher (Fig. 3).

Readings should be taken at each site at 08.00 and 15.00 hours. Hold the digital thermometer at waist height for 30 seconds. Write the air temperature on the recording sheet. Repeat the measurement two minutes later. Calculate the average (mean) temperature of the two readings. Record this on the sheet too. Do this in the morning and in the afternoon for three days.

Fig. 3

- (i) State a disadvantage of this method.

Disadvantage: .....  
..... [1]

- (ii) Suggest why the recordings were repeated each morning and afternoon.

.....  
..... [1]

QUESTION 1 CONTINUES ON PAGE 6

(d) Study Table 1, which shows the air temperature at each site.

Table 1

Air temperature at each site (°C)

Site	A	B	C	D	E	F	G	H	Average temperature (08.00 and 15.00)
Distance from building	32m	2m	3m	40m	1m	17m	9m	2m	
Day 1, 08.00	5.0	5.3	5.8	5.3	5.7	5.5	5.8	6.5	5.6
Day 1, 15.00	12.0	11.8	13.0	11.6	11.5	11.8	12.0	12.3	12.0
Day 2, 08.00	3.0	3.8	3.8	3.0	3.5	2.9	3.2	3.5	3.3
Day 2, 15.00	3.0	3.4	4.4	3.4	4.6	3.3	3.3	3.8	3.6
Day 3, 08.00	3.0	3.1	4.5	2.8	4.2	3.1	2.9	3.0	3.3
Day 3, 15.00	5.0	5.9	7.0	4.6	6.2	5.1	5.3	5.8	5.6
Three day site average	5.2	5.5	6.4	5.1	5.9	5.2	5.4	5.8	

Use the average temperature (08.00 and 15.00) data to describe the changes in air temperature during the three days.

.....

.....

.....

.....

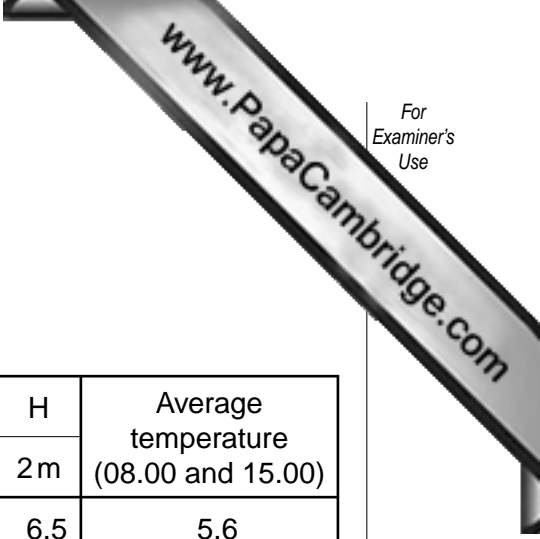
.....

.....

.....

.....

.....[3]





- (f) At the same times of each day, the students also used a digital hygrometer to measure the relative humidity at each site. The students observed and recorded the type of ground surface.

Study Table 2, which shows the results of the students' measurements and observations.

**Table 2**

Site	A	B	C	D	E	F	G	H
Average relative humidity	75%	77%	76%	75%	73%	73%	75%	77%
Type of ground surface	grass	small plants	concrete	tarmac	concrete	trees	near water	concrete

Is there a higher relative humidity at the sites where there is vegetation on the surface? Use the space below, and the average relative humidity data in Table 2 to calculate your result and state your answer.

**Space for calculations and answer**

Average relative humidity for sites with vegetation	
Average relative humidity for sites without vegetation	
Is there a higher relative humidity at the sites where there is vegetation on the surface?  Your answer	



(g) (i) Does the data collected by the students support the original hypotheses?

- *'the school buildings increase the outside air temperature'*
- *'vegetation on the surface of the ground affects the relative humidity'*

Ring your answer for each hypothesis and explain your decision.

Hypothesis 1 – *'the school buildings increase the outside air temperature'*

Answer        YES        TO SOME EXTENT        NO

Reason .....

.....

.....

Hypothesis 2 – *'vegetation on the surface of the ground affects the relative humidity'*

Answer        YES        TO SOME EXTENT        NO

Reason .....

.....

.....[4]

(ii) Critically evaluate the data collection methods used in this investigation.

.....

.....

.....

.....

.....

.....

.....

.....

.....

.....[3]

[Total: 30 marks]

- 2 Students investigated the impact of tourists on the settlement of Pescasseroli in the Abruzzi National Park in central Italy. The hypothesis for the investigation was *‘the tourists who visit the National Park have a positive impact on the settlement of Pescasseroli’*. Information about the settlement of Pescasseroli is shown below.

Pescasseroli is a settlement of 2000 inhabitants. It is located on a wide plain surrounded by mountains, in the heart of the Abruzzi National Park. Activities in winter include downhill skiing and cross country skiing. In the summer there are ample opportunities for a variety of trekking and outdoor activities. There are six hotels in the settlement and 11 restaurants for visitors and residents to use.

**Fig. 5**

- (a) The students used the Internet to find out about the settlement. The information in Fig. 5 is from this secondary source of data. They also collected primary data.

- (i) What is meant by a *primary* source of data?

.....  
 ..... [1]

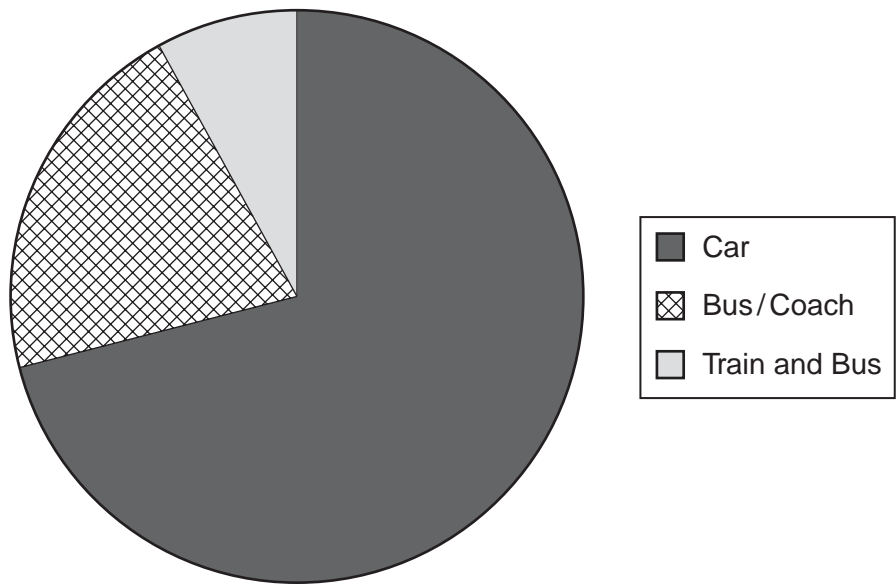
- (ii) State **two** examples of a primary source of data.

..... [1]

- (b) The students designed questionnaires for the tourists and residents to assess the impact of tourists. Fig. 6 (Insert) shows the questionnaires.

Question T1 (i) to the tourists was designed to investigate the method of transport used by tourists to reach the National Park. Fig. 7 is a pie chart of the results.

**Method of transport used by tourists**



**Fig. 7**

- (i) Describe the pattern shown by these results.  
Suggest **one** reason for this pattern.

Describe .....

.....

Reason .....

.....[3]

- (ii) Fig. 8 (Insert) shows the results of the questionnaire for tourists. Use the results from question T1 (ii) to complete the pictograph on Fig. 9, to represent the tourists' opinions about parking problems in the settlement. [2]

**Tourists' opinions about parking**

 Very difficult	
 A little difficult	
 No problem	

 or  or  = 4 people

**Fig. 9**

- (c) Study question T2 and question T3 of the questionnaire for tourists, Fig. 6 (Insert). Explain why these are important questions for the investigation.

.....

.....


.....

.....

.....

.....[3]





- (d) Study the results of question T4 of the questionnaire for tourists, Fig. 8 (Insert). Draw a bar graph on Fig. 10 to show the main reasons why visitors come to the Abruzzi National Park.

Reasons for visiting the Abruzzi National Park




Fig. 10

- (e) (i) Use the age and gender information from Fig. 8 (Insert) to explain whether the tourist questionnaire results in this sample are reliable and representative.

.....  
 .....  
 .....  
 ..... [2]

- (ii) Suggest how the main reason for visiting the National Park may change at a different time of the year or at a different time of the day.

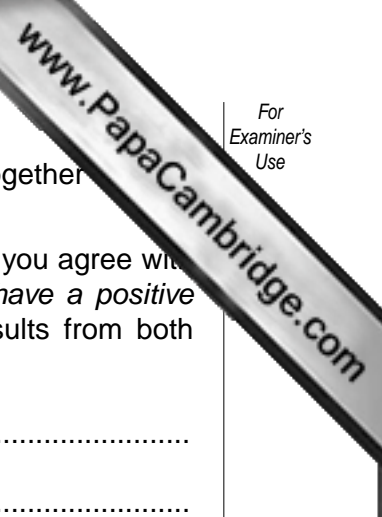
.....  
 .....  
 .....  
 .....  
 .....  
 ..... [3]

## Results of questionnaire for residents (125 results)

			Number	%
R1	Length of residency	Under 5 years	19	15
		5–10 years	22	18
		11–15 years	66	53
		Over 15 years	18	14
R2	Opinion of main problems	None	50	40
		Crowded	18	14
		Litter	15	12
		Traffic	26	21
		Noisy people	16	13

			Yes	No
R3	Residents' views on benefits of tourism	Tourism related job	66%	34%
		Adequate tourist facilities	72%	28%
		Adequate parking	69%	31%
		Improved facilities	83%	17%

Fig. 11



- (f) Study the results of the questionnaire for tourists, Fig. 8 (Insert) again, together with the results of the questionnaire for residents, Fig. 11.

Write a conclusion to this investigation, ensuring that you state whether you agree with the original hypothesis, that *'the tourists who visit the National Park have a positive impact on the settlement of Pescasseroli'*. You must refer to data results from both questionnaires to support your comments.

.....  
.....  
.....  
.....  
.....  
.....  
.....  
.....  
.....  
.....  
.....  
.....  
.....  
.....  
.....  
.....  
.....  
.....  
.....  
.....  
.....

[6]

